

NAME_____SEC_____ROLL NO._____
CODE : A

BURNPUR RIVERSIDE SCHOOL,BURNPUR
EVALUATION –II [2023-2024]
ENGLISH (WRITING)
CLASS- II

Time: 1 ½ Hrs

Maximum Marks:50

=====

SECTION-A

1. Spellings (1x10=10)

SECTION –B

2. Answer the following questions : (2x6=12)

- (i) Why did Grandpa want Meenu to plant a tree?
- (ii) What was the cat’s name in the story “ Everything Is New”?
- (iii) Name the animals the Little Round Bun meet on the road.
- (iv) What did all the animals say to the Little Round Bun?
- (v) Who wished Priya on her birthday early in the morning?
- (vi) What did Priya’s father tell the baker?

3. **Read the passage given below and answer the following questions :** (8)

Jenny has a pet . Her pet is a rabbit. She calls her Brownie. Brownie has a black and brown fur. She is one year old. Jenny likes Brownie because she is soft and cute. Jenny plays with Brownie everyday after school. Brownie's favourite food is carrot. She loves to sit on Jenny's chair. Jenny loves her rabbit.

- Q1. Who is Brownie? (2)
Q2. What is Brownie's favourite food ? (2)
Q3. **Fill in the blanks :** (1X2=2)
(a) Brownie has black and _____ fur.
(b) Brownie is _____ year old.
Q4. **Choose and write the opposite words for the words given below from the passage:** (1X2=2)
(a) hates
(b) before

SECTION -C

4. **Write the following sentence three times in proper cursive handwriting :** (1x3=3)

Action speaks louder than words.

SECTION -D

5. **Underline the proper nouns and circle the common nouns in the sentences given below:** (1x2=2)

- (i) Jimmy is my pet dog.
(ii) Sanya lives in Delhi.

6. **Underline the correct answer :** (1x3=3)

- (i) My friend bought a new (car/ cars).
- (ii) The (birds / bird) are sitting on the tree.
- (iii) The (pens / pen) is in the pencil box.

7. **Write down the feminine gender for each of the following masculine gender:** (1x3=3)

- (i) king
- (ii) uncle
- (iii) boy

8. **Add's and fill in the blanks with the words given in the bracket :** (1x2=2)

- (i) _____ sister is a doctor.(Rahul)
- (ii) I am going to my _____ house.(aunt)

9. **Fill in the blanks by choosing the suitable pronouns given in the bracket:** (1x2=2)

- (i) The dog is barking ._____ is angry. (You / It)
- (ii) Rita is in her room ._____is studying. (He /She)

SECTION -E

10. **Write the meanings of the following words:** (1x3=3)

- (i) sapling
- (ii) tip
- (iii) as usual

Make sentences with the given words :

(1x2=2)

- (i) tree
- (ii) beautiful

=====

NAME _____ SEC _____ ROLL NO. _____

CODE: A

BURNPUR RIVERSIDE SCHOOL, BURNPUR

EVALUATION – II[2023-2024]

MATHEMATICS

CLASS - II

Time: 1 ½ Hrs

Maximum Marks:45

=====

Section-A

1. **Write the subtraction fact for each addition :** (1x2=2)

(i) $5 + 5 = 10$

(ii) $10 + 2 = 12$

2. **Write the multiplication fact :** (1x3=3)

(i) $2 + 2 + 2 = 6$

(ii) $7 + 7 = 14$

(iii) $4 + 4 + 4 + 4 + 4 = 20$

3. **Add the following numbers :** (2x2=4)

(i)

| | H | T | O |
|---|-------------|---|---|
| | 3 | 2 | 3 |
| + | 2 | 0 | 4 |
| | <div></div> | | |

(ii)

| | T | O |
|---|-------------|---|
| | 5 | 4 |
| + | 2 | 3 |
| | <div></div> | |

4. **Subtract the following numbers :** (2x2=4)

(i)

| | H | T | O |
|---|----------------------|---|---|
| | 6 | 3 | 7 |
| - | 2 | 3 | 4 |
| | <input type="text"/> | | |

(ii)

| | T | O |
|---|----------------------|---|
| | 5 | 6 |
| - | 2 | 8 |
| | <input type="text"/> | |

5. **Multiply the following numbers :** (2x2=4)

(i)

| | H | T | O |
|--|----------------------|---|---|
| | 2 | 2 | 0 |
| | | x | 4 |
| | <input type="text"/> | | |

(ii)

| | T | O |
|--|----------------------|---|
| | 5 | 1 |
| | x | 5 |
| | <input type="text"/> | |

6. **Continue the pattern of shapes given below :** (1x2=2)

(i) ○ □ ○ □ ____

(ii) △ ▽ △ ▽ ____

7. **Circle the odd numbers :** (1x3=3)

(i) 52 53 54 55

(ii) 20 21 22 23

(iii) 71 72 73 74

8. **Draw the shapes mentioned below and write one property about each of them :** (2x2=4)

- (i) Rectangle
- (ii) Cylinder

9. **Word Problems :** (3x3=9)

- (i) Ram has 120 pens . Sam has 105 pens . How many pens do they have altogether ?
- (ii) There are 7 days in a week . How many days are there in 3 weeks ?
- (iii) A shopkeeper has 90 balls . He sold 30 balls . How many balls are left with him now ?

SECTION - B (1/2x10=5)

10. **Tables :**

- (i) $11 \times 2 = \underline{\hspace{2cm}}$
- (ii) $10 \times 5 = \underline{\hspace{2cm}}$
- (iii) $10 \times 2 = \underline{\hspace{2cm}}$
- (iv) $12 \times 9 = \underline{\hspace{2cm}}$
- (v) $11 \times 6 = \underline{\hspace{2cm}}$
- (vi) $10 \times 10 = \underline{\hspace{2cm}}$
- (vii) $12 \times 5 = \underline{\hspace{2cm}}$
- (viii) $12 \times 10 = \underline{\hspace{2cm}}$
- (ix) $11 \times 4 = \underline{\hspace{2cm}}$
- (x) $11 \times 1 = \underline{\hspace{2cm}}$

11. **Mental Ability :**

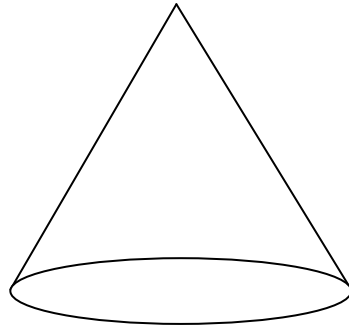
(i) **Fill in the missing number.**

$$100 - \underline{\quad\quad} = 100$$

(ii) **Fill in the blank.**

$$12 \times 0 = \underline{\quad\quad}$$

(iii) **Identify the solid shape and write its name.**



(iv) **Complete the following pattern of numbers.**

3 6 9

(v) Draw a slanting line.

=====

NAME _____ SEC _____ ROLL NO. _____
CODE:A

BURNPUR RIVERSIDE SCHOOL, BURNPUR
EVALUATION – II [2023- 2024]

EVS
CLASS : II

Time : 1 ½ Hrs.

Maximum Marks : 40

=====

1. **Fill in the blanks.** (1X8=8)

- (i) A _____ provides us many useful services.
- (ii) An _____ brings sick people to the hospital.
- (iii) Food provides various _____ to our body.
- (iv) The _____ food protect us from diseases.
- (v) The _____ are houses made of snow and blocks of ice.
- (vi) A _____ floats on water.
- (vii) The _____ grow along the ground.
- (viii) The ginger is the _____ of the plant.

2. **Answer the following questions.** (2x6=12)

- (i) What are shrubs? Give two examples.
- (ii) What are stilt houses?
- (iii) What is a hut?
- (iv) List any two healthy habits.
- (v) What are body-building foods? Give examples.
- (vi) Name any four places found in a neighbourhood.

3. **Write True or False.** (1x5=5)

- (i) The people in south India like to have rice and sambar. _____
- (ii) The caravans are houses that float on water. _____
- (iii) The doctors keep our neighbourhood safe. _____
- (iv) The broccoli is the flower of the plant. _____
- (v) We get rubber and spices from plants. _____

4. **Match the following.** (1x5=5)

- | | |
|------------------|-----------------------|
| (i) brick | a. energy-giving food |
| (ii) medicines | b. parcels |
| (iii) herb | c. apartments |
| (iv) post-office | d. pharmacy |
| (v) sugar | e. coriander |

5. **Answer in one word.** (1x10=10)

- (i) Name the gas given out by the plants.
- (ii) Give an example of a vegetable that is root of the plant.
- (iii) Which part of the plant grows into a fruit?
- (iv) Name any one temporary house.
- (v) What is a tent made of?
- (vi) What kind of food are pulses?
- (vii) What do people living near the sea primarily eat?
- (viii) Where do people safely keep their money?
- (ix) Who takes care of the sick people in the hospital?
- (x) Where do we generally find swings?

=====

CODE - A

BURNPUR RIVERSIDE SCHOOL
EVALUATION -2 [2023-2024]
L2 HINDI(WRITING)
CLASS-II

Time : 1:30 Hours

Maximum Marks: 50

खंड – ‘क’

प्रश्न1. वर्तनी । (दस)

1×10=10

खंड – ‘ख’

प्रश्न2. नीचे दिए गए प्रश्नों के उत्तर लिखिए -

2×6=12

- i बड़ा होकर युक्तार्थ क्या करना चाहता है ?
- ii किनको कोई कुछ नहीं कहता ?
- iii अमन चिड़ियाघर जाने की जिद क्यों कर रहा था ?
- iv अमन क्यों खुश था ?
- v नटखट चूहे को खाने में क्या भाता है ?
- vi नटखट चूहा बिल में कब छिप जाता है ?

प्रश्न3. नीचे दिए गए गद्यांश को पढ़कर पूछे गए प्रश्नों का

उत्तर लिखिए -

2x4=8

जंगल में एक तालाब है। तालाब में मछलियाँ तैर रही हैं। तालाब के किनारे एक मेंढक बैठा है। वहीं एक पेड़ है, जिस पर एक तोता बैठा है। पेड़ के नीचे हरी - हरी घास और कुछ फूलों के पौधे हैं। फूलों पर तितलियाँ बैठी हैं।

- i तालाब कहाँ था ?
- ii तालाब में कौन तैर रहा था ?
- iii पेड़ पर कौन बैठा था ?
- iv पेड़ के नीचे किसके पौधे हैं ?

खंड - 'ग'

प्रश्न 4.

सुलेख - नीचे दिए गए वाक्य को तीन बार लिखिए।

1×3=3

शेर जंगल का राजा है।

खंड - 'घ'

प्रश्न 5.

पर्यायवाची शब्द लिखिए -

1×3=3

- i पिता
- ii हवा
- iii पक्षी

प्रश्न6. लिंग बदलिए -

1×3=3

- i दादा
- ii बिटिया
- iii मगरमच्छ

प्रश्न7. विलोम शब्द लिखिए -

1×3=3

- i शाम
- ii धूप
- iii अंदर

प्रश्न8. एक से अनेक बनाइए -

1×3=3

- i रोटी
- ii बिल्ली
- iii चूहा

खंड- 'ड'

प्रश्न9. कठिन शब्दों के अर्थ लिखिए -

1×3=3

- i कोशिश
- ii वादा
- iii खबरदार

प्रश्न10. वाक्य बनाइए -

1×2=2

i गाँव

ii घर

BURNPUR RIVERSIDE SCHOOL
EVALUATION -2 (2023-2024)
L2 BENGALI(WRITING)
Class -II

Time:1½ Hrs

Maximum marks :50

বিভাগ -ক

1. **বানান** (1x10=10)

বিভাগ- খ

2. **প্রশ্ন ও উত্তর** (2x6=12)

- (i) চন্দননগর থেকে কে আসবেন?
- (ii) ফুলদানিতে কি কি ফুল থাকবে?
- (iii) কে বর্ষাতি পরে চলেছেন?
- (iv) কোথায় ঝরনার জল বেড়ে উঠল ?
- (v) কিসের শব্দ শোনা যাচ্ছে ?
- (vi) কোন নদীতে বান ডেকেছে ?

3. **নিচের গল্পটি পড়ে নিম্নে দেওয়া প্রশ্নগুলির উত্তর দাওঃ** (2x4=8)

আকাশে একটা কাক উড়ছিল।সেদিন খুব গরম ছিল।কাকটার খুব জল তেষ্ঠা পেয়েছিল।কোথাও এক ফোঁটা জল ছিল না।কাকটি জল তেষ্ঠায় এদিক ওদিক ঘুরে বেড়াতে লাগল।তারপর মাঠে একটা কলসি দেখতে পেল।কলসির কাছে যখন সে গেল তখন সে দেখল যে কলসিতে জল আছে কিন্তু সেটা অনেক নিচে।তখন সে দেখল কলসিটির পাশে অনেক নুড়ি পাথর পড়ে

আছে। সে তখন একটা করে নুড়ি পাথর সেই কলসির মধ্যে ফেলতে থাকল এবং সে দেখল যে কলসির জল আন্তে আন্তে উপরেরদিকে উঠতে থাকল এবং তারপর কাক মনের সুখে জল খেলো।

- ক. আকাশে কে উড়ছিল ?
- খ. কাকের কি তেষ্ঠা পেয়েছিল ?
- গ. মাঠে কাক কি দেখতে পেল ?
- ঘ. কলসির পাশে কি পড়েছিল ?

বিভাগ-গ

4. হাতের লেখা (তিনবার লিখবে) (1x3=3)

টাপুর টুপর বৃষ্টি পড়ে।

বিভাগ-ঘ

5. মিল শব্দ লেখো (1x4=4)

- (i) জল
- (ii) বন্যা
- (iii) বাড়ি
- (iv) শান্তা

6. সাজিয়ে লেখো (1x4=4)

- (i) নিফুলদা
- (ii) নন্দচ
- (iii) কচার

(iv) নেশস

7. বিপরীত শব্দ লেখো (1x4=4)

(i) মন্দ

(ii) আনন্দ

(iii) সবাই

(iv) অনেক

বিভাগ - ঙ

8. অর্থ লেখো (1x3=3)

(i) বেড়া

(ii) গর্জন

(iii) দুরন্ত

9. বাক্য রচনা করো (1x2=2)

(i) বর্ষাতি

(ii) ঝরনা

NAME_____SEC_____ROLL NO._____
CODE: A

BURNPUR RIVERSIDE SCHOOL,BURNPUR
EVALUATION – II [2023-2024]
GENERAL KNOWLEDGE
CLASS - II

Time : 1 ½ Hrs

Maximum Marks : 50

=====

1. **Fill in the blanks.** (2x5=10)

- (i) In Europe , the most commonly used currency is _____
- (ii) Our _____ pumps blood in our body.
- (iii) There are more than _____ muscles in our body.
- (iv) A scanner is used to _____ the documents.
- (v) The guitar is a _____ instrument.

2. **Write True or False.** (2x5=10)

- (i) We celebrate Teacher's Day on 5th of September. _____
- (ii) Greenland is the world's largest island. _____
- (iii) Walter Hunt is the inventor of safety pin. _____
- (iv) The words 'running' and 'writing' are action words. ____
- (v) 'Ganga' is a common noun. _____

3. **Match the following.** (2x5=10)

- | | |
|----------------------------|-------------------|
| (i) hill station | (a) Dollar |
| (ii) symbol of a country | (b) India |
| (iii) currency of USA | (c) try |
| (iv) we greet 'Namaste' in | (d) national flag |
| (v) rhyming word of 'cry' | (e) Ooty |

4. **Answer in one word.** (2x5=10)

- (i) What is the capital of West Bengal ?
- (ii) Name the famous museum of London.
- (iii) Which part of the body has the smallest bone ?
- (iv) Which word will be formed by combining
' bed + room ' ?
- (v) Name any one musical instrument.

5. **Fill in the blanks (School Almanac).** (2x5=10)

- (i) The students should be_____ working.
- (ii) The colour of the Cauvery house is _____
- (iii) The students should be _____ and punctual.
- (iv) The students should be very _____ wherever they go.
- (v) No student should damage any _____ property.

=====

NAME _____ SEC _____ ROLL NO. _____
CODE:A

BURNPUR RIVERSIDE SCHOOL, BURNPUR
EVALUATION-II[2023-2024]
MORAL VALUES
CLASS-II

Time:1 ½ Hrs

Maximum Marks:50

=====

I. Match the following: (2X5)

- | | |
|--------------------|----------------|
| 1.always listen to | a. time |
| 2.stealing | b. careless |
| 3.take bath | c. everyday |
| 4.Marvin | d. wrong thing |
| 5.valuable | e. inner voice |

II. Fill in the blanks: (2x5)

1. The inner voice is our _____ guide.
2. The voice inside us is known as _____ voice.
3. We should brush our teeth _____ a day.
4. Philip had neat and _____ habits.
5. An _____ is just like a clock.

III. Answer in one word: (2x5)

1. Who bless us when we listen to our inner voice?
2. What did Ankit and Sumit say to the shopkeeper?
3. Where should we throw waste papers?
4. What should we clip regularly ?
5. What does not wait for anyone?

IV. **Choose and write the correct answer:** (2x5)

1. The inner voice is our (friend/enemy).
2. God will be (unpleased /pleased) if we listen to inner voice.
3. Everyone will (like /dislike) us for good habits.
4. We should (always/never) spit on public.
5. Each work should be done at the (right/any) time.

V. **State true or false:** (2x5)

1. We should thank God for our good acts._____
2. We say sorry for our wrong works._____
3. The students must learn to comb their hair by themselves._____
4. We should never wash our hands before meals._____
5. We should be careless about our teeth._____

=====

NAME _____ SEC _____ ROLL NO. _____
CODE:A

BURNPUR RIVERSIDE SCHOOL, BURNPUR
EVALUATION-II [2023-2024]
COMPUTER SCIENCE
CLASS-II

Time-1 ½ Hrs.

Maximum Marks:40

=====

I. Choose and write the correct answer: (1X8)

1. To start the computer we switch (on/off) the UPS.
2. We switch off the (monitor/keyboard) button by pressing it lightly.
3. (Alphabet/number) keys contain the letters from A to Z.
4. We can find (three/two) Enter keys on a keyboard.
5. Open WordPad is in (Appsscreen /keyboard).
6. During typing the text ,we use different(keys/cursor) on the keyboard.
7. While working it is preferred to (save/cancel) your work.
8. Click on (Open/Close) button to open a file.

II. Fill in the blanks: (1x8)

1. Press the _____ button of the CPU.
2. When the light begins to glow ,it shows that the computer is _____.
3. Wait for sometime till the computer _____ automatically.
4. Switch off the monitor button by pressing it_____.

5. A _____ has many keys which do different things.
6. _____ is the longest key on a keyboard.
7. You can press _____ shortcut to close WordPad.
8. We use various _____ on the keyboard to type a text.

III. **Answer in one word:** (1x8)

1. What is pressing of the power button of CPU called?
2. Where do we insert a plug in order to start a computer?
3. How many Number keys are there?
4. How many Function keys are there?
5. How many methods are there to open a WordPad?
6. What kind of program is WordPad?
7. Where is save option present?
8. What option do we choose to close WordPad?

IV. **Write true or false:** (1X8)

1. Switching on the power button of CPU is called sketching-
2. The turn off option is clicked for shutting down the computer-
3. We should not switch off the main power button directly-
4. Do not touch the computer with wet hands-
5. Enter key is used to move the cursor to the next line-
6. Caps lock key helps to type capital or small letters-
7. The blinking line on the WordPad Window is called cursor-
8. Menu bar is not a main part of WordPad Window-

V. **Match the following:**

(1x8)

- | | |
|----------------------------------|---------------------|
| 1. Insert the plug in | a. Function keys |
| 2. The monitor button is pressed | b. Spacebar |
| 3. There are 4 steps to | c. Enter key |
| 4. Do not touch computer with | d. Caps lock key |
| 5. Type small or capital letters | e. wet hands |
| 6. Move to next line | f. start a computer |
| 7. Longest key | g. lightly |
| 8. Performs different functions | h. electric socket |

=====

NAME _____ SEC _____ ROLL NO. _____

CODE: B

BURNPUR RIVERSIDE SCHOOL, BURNPUR
EVALUATION – II [2023-2024]
ENGLISH (WRITING)
CLASS - II

Time : 1 ½ Hrs

Maximum Marks : 50

=====

SECTION - A (10 Marks)

1. Spellings. (1x10=10)

SECTION - B (20 Marks)

2. Answer the following questions. (2x6=12)

- (i) What was the cat's name in the story " Everything Is New" ?
- (ii) Why did Grandpa want Meenu to plant a tree ?
- (iii) Who said , " Do bake me a bun" ?
- (iv) What did all the animals say to the Little Round Bun?
- (v) What changed Priya's life forever ?
- (vi) Who wished Priya on her birthday early in the morning ?

3. Read the passage given below and answer the following questions. (8)

There is a park near Tina's house. It is very big and green. There is a pond in the park. There is a swing , a see - saw , a slide and a merry - go - round in the park for the children to enjoy. Children love to visit this park.

- (i) Where is the park ? (2)
- (ii) What is there in the park for the children to enjoy ? (2)
- (iii) **Fill in the blanks :-** (1x2=2)
- (a) The park is very _____ and green.
- (b) There is a pond in the _____
- (iv) **Find out and write the opposite words for the words given below from the passage.** (1x2=2)
- (a) far -
- (b) hate -

SECTION - C (3 Marks)

4. Write the following line three times in a proper cursive handwriting. (3)

A cat has nine lives.

SECTION - D (12 Marks)

5. Underline the proper nouns and circle the common nouns in the sentences given below. (1x2=2)
- (i) Sunday is my favourite day.
- (ii) Ramesh is my brother.
6. Write the plural words for each of the following singular words. (1x3=3)

| <u>Singular</u> | <u>Plural</u> |
|-----------------|---------------|
| (i) cap | _____ |
| (ii) baby | _____ |
| (iii) dog | _____ |

7. Write the feminine gender for each of the following (1x3=3)
masculine gender.

| | <u>Masculine gender</u> | <u>Feminine gender</u> |
|-------|-------------------------|------------------------|
| (i) | father | _____ |
| (ii) | uncle | _____ |
| (iii) | king | _____ |

8. Add ('s) and fill in the blanks with the words given (1x2=2)
in the brackets.

- (i) This is my _____ room. (sister)
(ii) _____ cat is very active. (Rohan)

9. Underline the pronouns in the given sentences. (1x2=2)

- (i) I have a pet dog.
(ii) His father is a doctor.

SECTION - E (5 Marks)

10. Write the meanings of the words given below. (1x3=3)

- (i) sapling -
(ii) tip -
(iii) as usual -

11. Make sentences from the words given below. (1x2=2)

- (i) pretty -
(ii) birthday –

=====

NAME_____SEC_____ROLL NO._____

CODE: B

BURNPUR RIVERSIDE SCHOOL,BURNPUR

EVALUATION – II [2023-2024]

MATHEMATICS

CLASS - II

Time : 1 ½ Hrs

Maximum Marks : 45

=====

SECTION - A (35 marks)

1. Write the subtraction fact for each addition. (1x2=2)

(i) $18 + 2 = 20$

(ii) $7 + 3 = 10$

2. Write the multiplication fact. (1x3=3)

(i) $7 + 7 + 7 = 21$

(ii) $2 + 2 + 2 + 2 + 2 = 10$

(iii) $9 + 9 = 18$

3. Add the following numbers. (2x2=4)

(i)
$$\begin{array}{r} \text{T O} \\ 42 \\ + 22 \\ \hline \end{array}$$

(ii)
$$\begin{array}{r} \text{H T O} \\ 110 \\ + 110 \\ \hline \end{array}$$

4. Subtract the following numbers. (2x2=4)

(i)

| | H | T | O |
|---|----------------------|---|---|
| | 3 | 4 | 6 |
| - | 2 | 0 | 0 |
| | <input type="text"/> | | |

(ii)

| | T | O |
|---|----------------------|---|
| | 9 | 3 |
| - | 7 | 4 |
| | <input type="text"/> | |

5. Multiply the following numbers. (2x2=4)

(i)

| | T | O |
|---|----------------------|---|
| | 1 | 6 |
| x | 2 | |
| | <input type="text"/> | |

(ii)

| | H | T | O |
|---|----------------------|---|---|
| | 5 | 4 | 6 |
| x | 1 | | |
| | <input type="text"/> | | |

6. Continue the pattern of numbers. (1x5=5)

(i) 6 8 10 _____

(ii) 10 20 30 _____

(iii) 5 10 15 _____

(iv) 100 200 300 _____

(v) 888 777 666 _____

7. Draw the shapes mentioned below and write one property about each of them. (2x2=4)

(i) Square

(ii) Cone

8. Word Problems. (3x3=9)

(i) There are 10 girls and 12 boys in a class. How many children are there altogether ?

(ii) Ram has 59 balls. He lost 16 balls. How many balls does Ram have now ?

(iii) A bus has 4 wheels. How many wheels do 200 buses have ?

SECTION - B (5 marks)

9. Tables. ($\frac{1}{2} \times 10 = 5$)

(i) $10 \times 9 =$ _____

(ii) $11 \times 4 =$ _____

(iii) $12 \times 2 =$ _____

(iv) $10 \times 7 =$ _____

(v) $11 \times 3 =$ _____

(vi) $12 \times 5 =$ _____

(vii) $10 \times 10 =$ _____

(viii) $11 \times 8 =$ _____

(ix) $12 \times 9 =$ _____

(x) $10 \times 6 =$ _____

SECTION - C (5 marks)

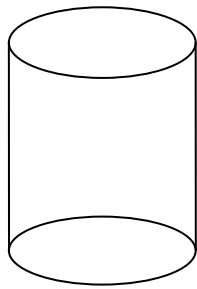
10. Mental Ability.

(1x5=5)

(i) Continue the pattern.



(ii) Identify the solid shape and write its name.



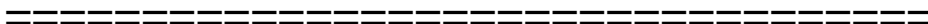
(iii) Fill in the blank.

A rectangle has _____ sides.

(iv) Circle the even numbers.

62 63 64 65

(v) Draw a standing line.



NAME _____ SEC _____ ROLL NO _____
CODE:B

BURNPUR RIVERSIDE SCHOOL, BURNPUR
EVALUATION – II[2023-2024]

E.V.S.
CLASS - II

Time: 1 ½ Hrs

Maximum Marks:40

=====

1. **Fill in the blanks :-** (1x8=8)

- (i) A _____ provides us many useful services.
- (ii) Milk is mainly a _____ food.
- (iii) _____ keeps our neighbourhood safe.
- (iv) Houses made of big blocks of ice are called _____.
- (v) _____ foods protect us from illness.
- (vi) The trees have a thick , hard , woody stem called a _____.
- (vii) A _____ floats on water.
- (viii) _____ are also known as bushes.

2. **Answer the following questions :-** (2x6=12)

- (i) What is a neighbourhood ?
- (ii) What are nutrients ?
- (iii) Why do we need a shelter ?
- (iv) What do you mean by a balanced meal ?
- (v) Write any two ways in which plants are useful to us.
- (vi) What are caravans ?

3. **Write True/False:-** (1x5=5)

- (i) Huts are built using materials like mud and straw.
_____.
- (ii) People who eat meat and eggs are called vegetarians._____.
- (iii) We should keep our neighbourhood clean.
_____.
- (iv) A flower grows into a fruit._____.
- (v) Shrubs are plants with weak stems._____.

4. **Match the following :-** (1x5=5)

| Column A | Column B |
|------------------------------|-------------------------|
| (i) banks | (a) protective foods |
| (ii) letters and parcels | (b) canvas cloth |
| (iii) pumpkin and strawberry | (c) creepers |
| (iv) tents are made of | (d) post-office |
| (v) apple and carrot | (e) keep our money safe |

5. **Answer in one word :-** (1x10=10)

- (i) Who takes care of the sick people in the hospital ?
- (ii) What do people living near the sea primarily eat ?
- (iii) Where would you go if your car gets stolen ?
- (iv) Name any one temporary house.
- (v) Which part of the plant grows into a fruit ?
- (vi) Where do you find swings ?

- (vii) How many glasses of water should we drink in a day ?
- (viii) Give an example of a vegetable that is stem of the plant.
- (ix) What are houses made of mud , straw and bamboo called ?
- (x) Name the gas given out by the plants.

=====

CODE:B

BURNPUR RIVERSIDE SCHOOL
EVALUATION -2: [2023-2024]
L2 HINDI [WRITING]
CLASS -II

Time :1:30 Hours

Maximum Marks:50

खंड – ‘क’

1. वर्तनी। (दस) 1×10=10

खंड – ‘ख’

2. प्रश्नों के उत्तर लिखिए। 2×6=12

- i युक्तार्थ किस गाँव का रहने वाला है ?
- ii अम्मा क्या करने को मना करती है ?
- iii अमन क्यों खुश था ?
- iv अमन के पिताजी ने उससे क्या वादा किया था ?
- v नटखट चूहे की क्या विशेषता है ?
- vi नटखट चूहे को खाने में क्या भाता है ?

3. अनुच्छेद लिखिए। (कोई एक) 8×1=8

- i मेरा प्रिय मित्र
- ii मेरा देश भारत

खंड – ‘ग’

4. सुलेख - नीचे दिए गए वाक्य को तीन बार लिखिए। 1×3=3

हमें आलस्य नहीं करना चाहिए।

खंड – ‘घ’

5. पर्यायवाची शब्द लिखिए - 1×3=3

i पिता

ii सूर्य

iii फूल

6. लिंग बदलो - 1×3=3

i पिता

ii बालक

iii शेर

7. विलोम शब्द लिखो - 1×3=3

i आज

ii हँसना

iii डाँट

8. एक से अनेक बनाइए -

1×3=3

i रोटी

ii बिल्ली

iii फूल

खंड- 'ड'

9. कठिन शब्दों के अर्थ लिखिए -

1×3=3

i अम्मा

ii शौक

iii नटखट

10. दिए गए शब्दों से वाक्य बनाइए -

1×2=2

i गाँव

ii बंदर

BURNPUR RIVERSIDE SCHOOL

CODE-B

EVALUATION-2 (2023-2024)

L2 BENGALI,(WRITING)

CLASS-II

TIME-1 ½ Hours

Maximum Marks:50

বিভাগ-ক

1X10=10

১. বানান লেখো :-

বিভাগ-খ

2X6=12

২) নিম্নলিখিত প্রশ্নের উত্তর দাও:-

ক) চন্দননগর থেকে কে আসবেন ?

খ) কোন নদীতে বন্যা দেখা দিয়েছে ?

গ) কে বর্ষাতি পরে চলেছে ?

ঘ) কিসের শব্দ শোনা যাচ্ছে ?

ঙ) কান্তি মিত্র র বাড়ি কোথায় ?

চ) বর্ষায় কাদের কাজকর্ম সব বন্ধ ?

৩) গল্প টি পরে উত্তর দাও :-

2x4=8

এক গ্রামে এক কাঠুরে ছিল। সে নদীর ধরে গাছ কাটছিল। তার হাত থেকে একদিন কুড়ুলটা জলে পরে যায়। কাঠুরে খুব গরীব ছিল। গাছ বিক্রি করেই তার সংসার চলতো। সে বনে একটি গাছের নিচে বসে বসে খুব কাঁদতে লাগলো আর জলদেবতা কে ডাকতে লাগলো।

প্রশ্ন গুলির উত্তর দাও :-

১. কাঠুরে কোথায় থাকতো ?
২. সে কোথায় গাছ কাটছিলো ?
৩. কি করে তার সংসার চলতো ?
৪. তার হাত থেকে কি জলে পরে যায় ?

বিভাগ – গ

৪) হাতের লেখা লেখো :- (তিনবার করে লেখো)

1X3=3

বুদ্ধি যার বল তার।

বিভাগ – ঘ

৫) শব্দমিল :-

1X4=4

১) গর্ত ২) বন্যা ৩) ছুটি ৪) বাড়ি

৬) সাজিয়ে লেখো :-

1X4=4

১) নিফুলদা ২) ন্দআক ৩) কচার ৪) লাবাদ

৭) বিপরীত শব্দ লেখো :-

1X4=4

১)মন্দ ২)আনন্দ ৩) অনেক ৪) সবাই

বিভাগ – ৩

৮) মানে লেখো :-

1X3=3

১)গর্মি ২)দুরন্ত ৩)সঙ্গে

৯) বাক্য রচনা করো :-

1x2=2

১)বর্ষাতি ২)ঝরনা

NAME _____ SEC _____ ROLL NO. _____
CODE:B

BURNPUR RIVERSIDE SCHOOL, BURNPUR
EVAUATION-II[2023-2024]

G.K.
CLASS-II

Time:1 ½ Hrs

Maximum Marks:50

=====

- I. **Fill in the blanks:** (2x5)
1. In Europe most commonly used currency is _____.
 2. The currency used in the USA is _____.
 3. _____ is the largest internal organ in our body.
 4. There are more than _____ muscles in our body.
 5. The smallest bone is present in our _____.
- II. **Write true or false:** (2x5)
1. Independence Day is celebrated on 15th August-
 2. People in Greenland live in huts-
 3. James Watt invented Steam engine-
 4. Painting is an example of action words-
 5. Taj Mahal is a proper noun-
- III. **Give one word answer:** (2X5)
1. What is the capital of West Bengal?
 2. Where do we find American Museum of Natural History?
 3. What is the muscles of the heart called?
 4. What is Pan+cake called?
 5. Name the instrument that consists of China clay bowls?

IV. **Match the following:** (2X5)

- | | |
|-------------------|---------------|
| 1. Ooty | a. Hair |
| 2. Tricolour flag | b. France |
| 3. Russia | c. Ruble |
| 4. Bonjour | d. India |
| 5. Care | e. Tamil Nadu |

V. **Fill in the blanks(Almanac).** (2X5)

1. The students should be _____ working.
2. The students should be clean and _____ dressed.
3. No students should damage any _____ property.
4. The colour of the Cauvery house is _____.
5. The students should be very _____ wherever they go.

=====

NAME _____ SEC _____ ROLL NO. _____
CODE: B

BURNPUR RIVERSIDE SCHOOL, BURNPUR
EVALUATION –II [2023-2024]
MORAL VALUES
CLASS- II

Time : 1 ½ Hrs

Maximum Marks : 50

=====

1. Match the following : (2x5=10)

- | | |
|----------------------|-------------------|
| (i) always listen to | (a) time |
| (ii) thank God for | (b) neat and tidy |
| (iii) books and toys | (c) proper places |
| (iv) Philip | (d) good works |
| (v) valuable | (e) inner voice |

2. Fill in the blanks : (2x5=10)

- (i) The inner voice is our _____ guide.
- (ii) Our inner voice helps us to take the right _____.
- (iii) Marvin was _____ about his habits.
- (iv) We should brush our teeth _____ a day.
- (v) We should never _____ our time.

3. Answer in one word : (2x5=10)

- (i) What did Ankit and Sumit do in the shop?
- (ii) Who bless us when we listen to our inner voice?
- (iii) Where should we throw waste papers?
- (iv) What should we clip regularly?
- (v) What is valuable to everyone ?

4. Choose and write the correct answer : (2x5=10)

- (i) We should say (sorry /thank you) for our wrong deeds.
- (ii) God will be (unpleased / pleased) if we listen to inner voice.
- (iii) We should throw wrappers in (classroom/dustbin).
- (iv) Everyone will (like /dislike)us for our good habits.
- (v) We should always (waste / value) time.

5. Write True or False : (2x5=10)

- (i) We say sorry for our wrong deeds. _____
- (ii) We make God unhappy by listening to our inner voice. _____
- (iii) We should always put on clean clothes. _____
- (iv) We should never wash our hands before meals. _____
- (v) An hourglass helps us to keep time. _____

=====

NAME _____ SEC _____ ROLL NO. _____
CODE: B

BURNPUR RIVERSIDE SCHOOL, BURNPUR
EVALUATION –II [2023-2024]
COMPUTER SCIENCE
CLASS- II

Time : 1 ½ Hrs

Maximum Marks: 40

=====

1. Choose and write the correct answer : (1x8=8)

- (i) To start the computer we switch (on/ off) the UPS.
- (ii) We switch off the (monitor /keyboard) button by pressing it lightly.
- (iii) We can find (three / two) Enter keys on a keyboard.
- (iv) Windows key is also referred as (Win /Rin) key.
- (v) Click on (open/close) button to open a file.
- (vi) Open Wordpad is in (Apps screen /keyboard).
- (vii) During typing the text ,we use different (keys/ cursor) on the keyboard.
- (viii) While working ,it is preferred to (save /cancel) your work.

2. Fill in the blanks: (1x8=8)

- (i) When the light begins to glow, it shows that the computer is _____.
- (ii) Press the _____ button of the CPU.
- (iii) Switch off the monitor button by pressing it _____.
- (iv) Wait for sometime till the computer _____ automatically.
- (v) _____ is the longest key on a keyboard.

- (vi) A _____ has many keys which do different things.
- (vii) The blinking line on a Wordpad window is called _____.
- (viii) It is good to _____ our documents while working on it.

3. Answer in one word :

(1x8=8)

- (i) What do we press to switch on the monitor?
- (ii) What is pressing of the power button of CPU called?
- (iii) How many Alphabet keys are there?
- (iv) Which keys are also called cursor control key?
- (v) Where is save option present?
- (vi) How many methods are there to open Wordpad?
- (vii) What option do we choose to close Wordpad?
- (viii) What kind of program is Wordpad?

4. Write True or False :

(1x8=8)

- (i) We should not switch off the main power button directly _____.
- (ii) The turn off option is clicked for shutting down the computer ._____
- (iii) Switching on the main power button of CPU is the first step in starting the computer._____
- (iv) Do not touch the computer with wet hands .

- (v) Delete key is used to erase the letter to the left side of the cursor ._____

- (vi) Page Up key moves the page upside. _____
- (vii) Menu bar is not a main part of Wordpad window _____.
- (viii) We use various keys on the keyboard to type the text. _____

5. Match the following :

(1x8=8)

- | | |
|---|----------------------|
| (i) There are 4 steps to | (a) Function keys |
| (ii) Insert the plug in | (b) Caps Lock key |
| (iii) Do not touch computer or plug with | (c) Enter Key |
| (iv) The monitor button is pressed | (d) Spacebar Key |
| (v) Longest key | (e) lightly |
| (vi) move to the next line | (f) wet hands |
| (vii) type words in capital or small | (g) electric socket |
| (viii) perform different functions | (h) start a computer |
